







SHAPES

1. QUESTION

How many vertices does a triangular prism have? Answer = ____

2. QUESTION

Label the following things according to their solid shapes.

3. QUESTION

This solid has 4 vertices, 6 edges, and 4 faces. What is it called?

cube

sphere

prism

tetrahedron

4. QUESTION

A _____ has only one vertex.

cylinder

cone

prism

pyramid

5. QUESTION

Complete the following sentences.

A _____ has six square faces.

A _____ has two circle faces and one curved face.

6. QUESTION

I have four rectangular faces and two squares faces. I am a ____.

cube

cuboid

cylinder

pentagon

7. QUESTION

Write in words.

11 – _____

90 – _____

43 – _____

67 – _____

81 – _____

13 – _____

70 – _____

8. QUESTION

Circle the prisms.

