

VOLUME 2

Remember

Volume = Area x length

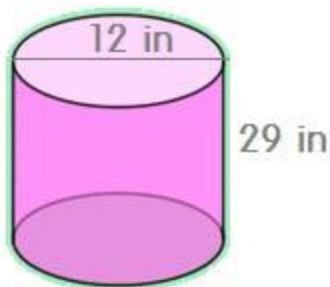
Area of a Circle = πr^2

Volume = Area x length

1. 1

1. QUESTION

Find the volume of the following cylinders.



o a)

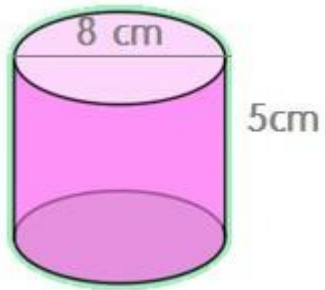
Area of a Circle = πr^2

$\pi = 3.14$

Volume = Area x length

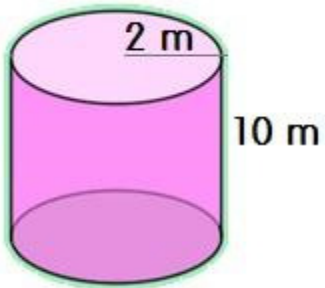
Volume = in² x = in³ ← Answer

b)



Volume = Area x length

Answer = _____

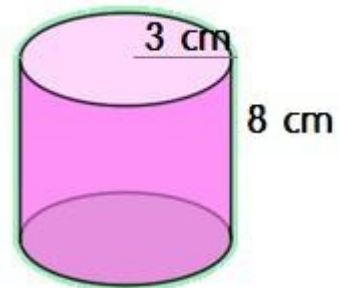


c)

Volume = Area x length

Answer = _____

d)



Volume = Area x length

Answer = _____